










Put a check in the box that tells how you do each skill.

Skills			
	I can do this on my own and explain how to do this.	I can do this on my own.	I can do this if I get help or look at an example.
① Use a ruler to measure to the nearest $\frac{1}{2}$ inch. 			
② Organize data on a line plot. 			
③ Describe a quadrilateral. 			
④ Find the perimeter of a polygon. 			
⑤ Find the area of a rectangle. 			
⑥ Find the area of a rectilinear figure. 			

Unit 4 Self Assessment

NAME

DATE

TIME

Lesson 4-13

